

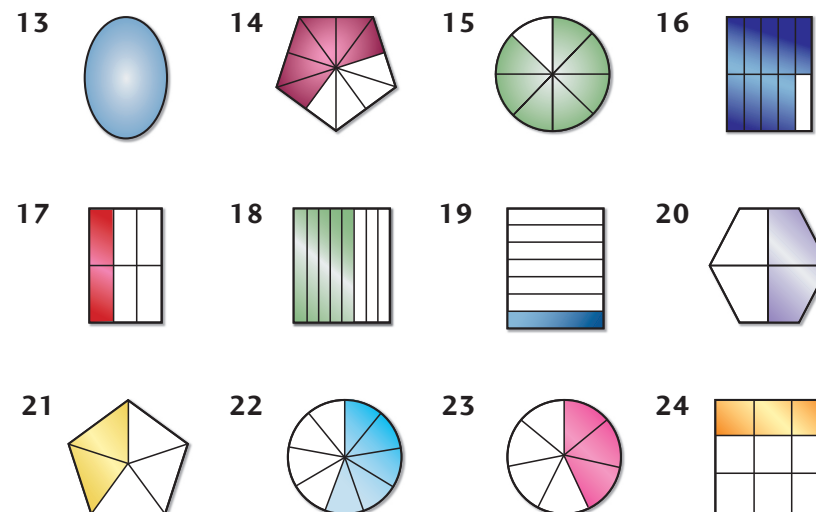
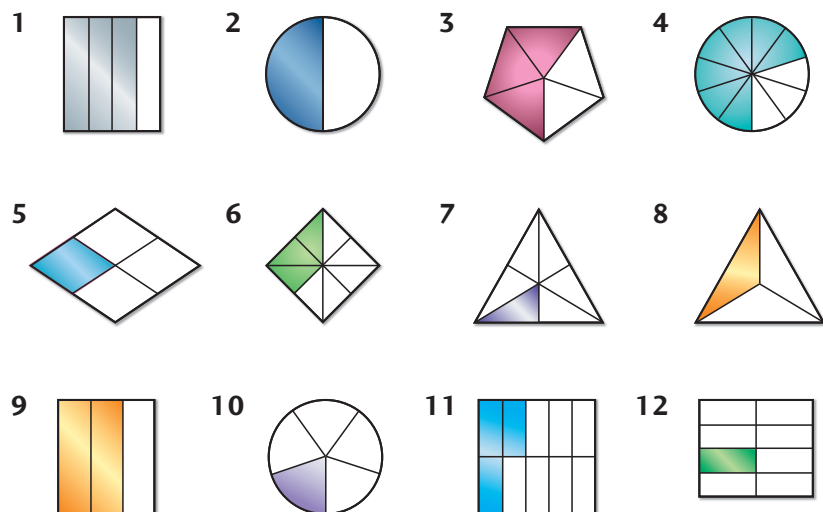


1 Bild till bråktalet

Underlägg 24
Färgmönster 41



Hitta bråktalet som passar med den färgade ytan.



10 Adderade bråkta 1 - samma bråkt

Underlägg 24

Färgmönster 11



Utan förkortning. Sök summan i högra sifferkolumnen

1 $\frac{7}{12} + \frac{1}{12}$

2 $\frac{1}{10} + \frac{3}{10}$

3 $\frac{1}{12} + \frac{9}{12}$

4 $\frac{3}{10} + \frac{4}{10}$

5 $\frac{1}{8} + \frac{2}{8}$

6 $\frac{3}{8} + \frac{3}{8}$

7 $\frac{1}{4} + \frac{1}{4}$

8 $\frac{1}{5} + \frac{2}{5}$

9 $\frac{4}{15} + \frac{7}{15}$

10 $\frac{2}{5} + \frac{2}{5}$

11 $\frac{1}{4} + \frac{2}{4}$

12 $\frac{1}{3} + \frac{1}{3}$

$\frac{2}{3}$ 1

$\frac{2}{4}$ 2

$\frac{3}{4}$ 3

$\frac{3}{5}$ 4

$\frac{4}{5}$ 5

$\frac{3}{8}$ 6

$\frac{6}{8}$ 7

$\frac{4}{10}$ 8

$\frac{7}{10}$ 9

$\frac{8}{12}$ 10

$\frac{10}{12}$ 11

$\frac{11}{15}$ 12

Med förkortning. Sök summan i högra sifferkolumnen.

13 $\frac{5}{12} + \frac{9}{12}$

14 $\frac{13}{10} + \frac{13}{10}$

15 $\frac{5}{4} + \frac{7}{4}$

16 $\frac{9}{10} + \frac{9}{10}$

17 $\frac{5}{4} + \frac{1}{4}$

18 $\frac{11}{6} + \frac{1}{6}$

19 $\frac{1}{4} + \frac{1}{4}$

20 $\frac{5}{6} + \frac{5}{6}$

21 $\frac{3}{8} + \frac{11}{8}$

22 $\frac{9}{10} + \frac{5}{10}$

23 $\frac{2}{3} + \frac{2}{3}$

24 $\frac{5}{8} + \frac{5}{8}$

$\frac{1}{2}$ 13

1 $\frac{1}{2}$ 14

1 $\frac{1}{3}$ 15

1 $\frac{2}{3}$ 16

1 $\frac{1}{4}$ 17

1 $\frac{3}{4}$ 18

1 $\frac{2}{5}$ 19

2 $\frac{3}{5}$ 20

1 $\frac{4}{5}$ 21

1 $\frac{1}{6}$ 22

2 23

3 24